







GRADE: IV Date: 11-01- 2024	CPE 2 (2023-24) EVS	Marks:20 Time: 50 minutes
--	--------------------------------------	--

Name:

Class & Section:

Q.No	Questions	Mark
	Section A	
	Choose the correct answer	
1	Blind people use their _____ to read Braille. a. brain, b. fingers, c. toes d. none of these	1
2	An animal that destroys plants, crops, furniture and other things are called _____. a. germs b. pests c. insects d. none of these	1
3	A skilled potter has developed the sense of _____. a. vision b. smell c. touch d. taste	1
4	Yellow lentils and chickpeas are _____. a. grains b. pulses c. millets d. cereals	1
	Write True or False	
5	The father of the green revolution of the world is Dr. M S Swaminathan.	1
6	Rice needs a huge amount of water to grow, which is why it is grown in places that receive high rainfall.	1
7	A person who has problems with one of their senses learns how to use other senses better.	1
	Fill in the blanks	
8	_____ gets mixed with the food, makes it wet and is shaped into balls in the mouth.	1

9	A _____ is the ability to do something well.	1
10	Sorghum is a _____.	1
Section B		
Answer the following		
11	Why do elders advice not to talk while eating food?	2
12	<p>Complete the flowchart</p> <div style="border: 1px solid black; border-radius: 10px; padding: 5px; margin-bottom: 10px;"> We experience world around us through _____ </div> <div style="text-align: center; margin-bottom: 10px;">  </div> <div style="border: 1px solid black; border-radius: 10px; padding: 5px; margin-bottom: 10px;"> The brain reads _____ </div> <div style="text-align: center; margin-bottom: 10px;">  </div> <div style="border: 1px solid black; border-radius: 10px; padding: 5px; margin-bottom: 10px;"> The brain tells us _____ </div> <div style="text-align: center; margin-bottom: 10px;">  </div> <div style="border: 1px solid black; border-radius: 10px; padding: 5px;"> We follow _____ </div>	2
13	<p>Case Study 1:</p> <div style="text-align: center; margin-bottom: 10px;">  </div> <p>The above picture is the situation of a carton of milk bought by Minnie from a supermarket on May 6. Though Minnie bought the milk in May, she kept it in the fridge till June 10.</p>	2

	<p>a. What is the best before date? What might have happened to the milk Minnie bought by June 10?</p> <p>b. Why is it important to understand and look for this date before buying any product from the market?</p> <p>c. Do you think that any food product with a long expiration date is good for health?</p>	<p>1</p> <p>1</p>
14	<p>Case Study 2: Ramu was given a middle bench to sit during a seat arrangement in the class. His friend noticed that Ramu always stretches his head in front or goes near the black board to write down the notes written in the board. Due to this, he always lags in his notes in class.</p> <p>a. What might help Ramu to solve this problem?</p> <p>b. What will you do if your friend has an issue to hear properly in class?</p>	<p>1</p> <p>1</p>